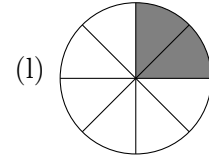
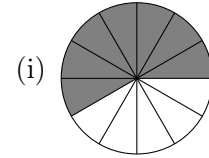
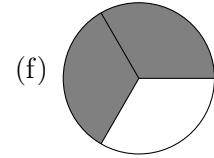
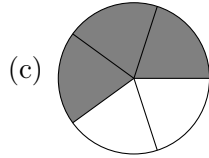
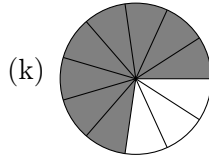
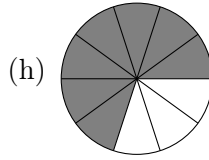
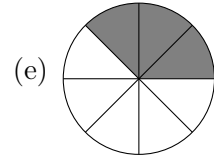
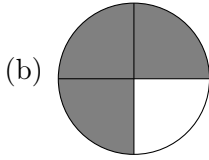
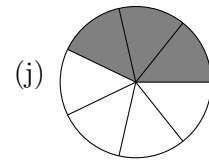
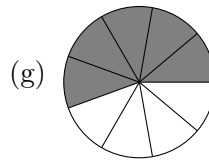
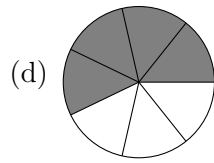
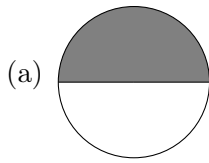


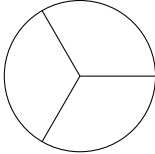
Arbeitsblatt Bruchteile 1

1. Bestimme die Bruchteile

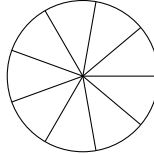


2. Färbe die entsprechenden Bruchteile

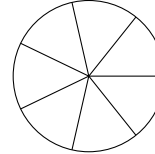
(a) $\frac{2}{3}$



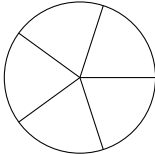
(c) $\frac{4}{9}$



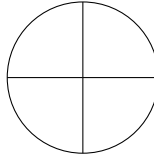
(e) $\frac{6}{7}$



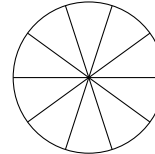
(b) $\frac{2}{5}$



(d) $\frac{1}{4}$



(f) $\frac{3}{10}$



3. Berechne die Anteile.

(a) $\frac{1}{2}$ von 8 h

(d) $\frac{3}{4}$ von 1 h

(g) $\frac{2}{3}$ von 2 h

(b) $\frac{1}{4}$ von 12 kg

(e) $\frac{4}{5}$ von 1 m

(h) $\frac{2}{7}$ von 35 mm

(c) $\frac{1}{5}$ von 25 cm

(f) $\frac{9}{10}$ von 3 kg

(i) $\frac{5}{12}$ von 1 h

4. Markiere $\frac{17}{25}$ des Rechteckes.

