

# Lösungen AB Bruchteile 1

1. Bestimme die Bruchteile

(a)  $\frac{1}{2}$

(b)  $\frac{3}{4}$

(c)  $\frac{3}{5}$

(d)  $\frac{4}{7}$

(e)  $\frac{3}{8}$

(f)  $\frac{2}{3}$

(g)  $\frac{5}{9}$

(h)  $\frac{7}{10}$

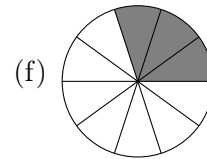
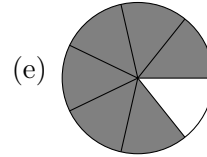
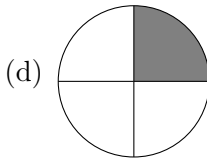
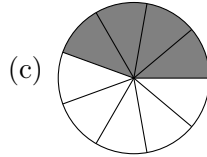
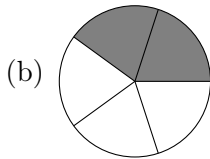
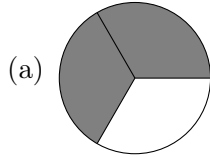
(i)  $\frac{7}{12}$

(j)  $\frac{3}{7}$

(k)  $\frac{8}{11}$

(l)  $\frac{2}{8}$

2. Färbe die entsprechenden Bruchteile



3. Berechne die Anteile.

(a) 4 h

(b) 3 kg

(c) 5 cm

(d) 45 min

(e) 8 dm

(f) 2700 g

(g) 80 min

(h) 10 mm

(i) 25 min

4. Markiere  $\frac{17}{25}$  des Rechteckes.

