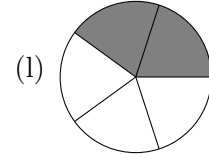
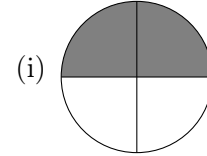
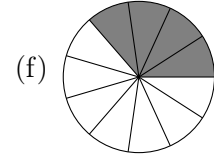
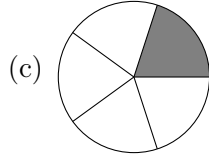
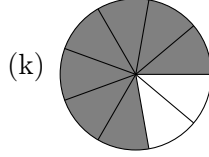
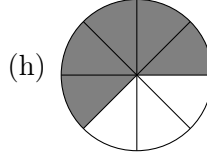
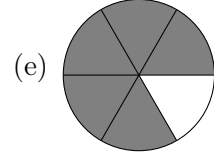
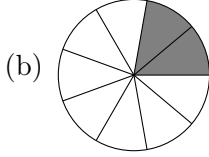
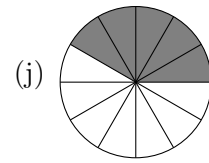
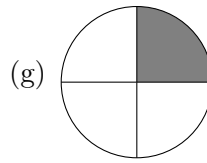
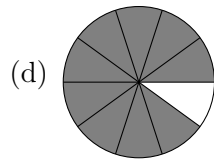
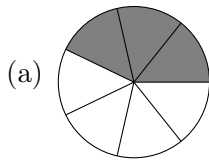


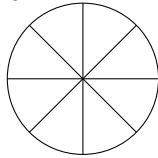
Arbeitsblatt Bruchteile 2

1. Bestimme die Bruchteile

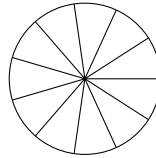


2. Färbe die entsprechenden Bruchteile

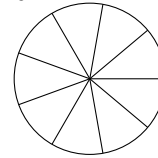
(a) $\frac{6}{8}$



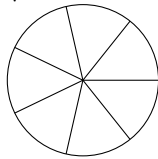
(c) $\frac{5}{11}$



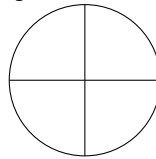
(e) $\frac{5}{9}$



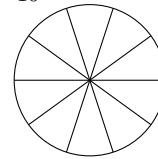
(b) $\frac{4}{7}$



(d) $\frac{3}{4}$



(f) $\frac{7}{10}$



3. Berechne die Anteile.

(a) $\frac{1}{2}$ von 16 km

(d) $\frac{2}{7}$ von 14 s

(g) $\frac{3}{5}$ von 2 h

(b) $\frac{1}{3}$ von 6 g

(e) $\frac{5}{6}$ von 1 h

(h) $\frac{2}{7}$ von 42 mm

(c) $\frac{4}{5}$ von 30 mm

(f) $\frac{3}{10}$ von 2 km

(i) $\frac{11}{12}$ von 4 min

4. Welcher Anteil ist gefärbt?

