

Lösungen AB Bruchteile 2

1. Bestimme die Bruchteile

(a) $\frac{3}{7}$

(b) $\frac{2}{9}$

(c) $\frac{1}{5}$

(d) $\frac{9}{10}$

(e) $\frac{5}{6}$

(f) $\frac{4}{11}$

(g) $\frac{1}{4}$

(h) $\frac{5}{8}$

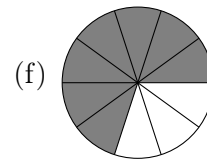
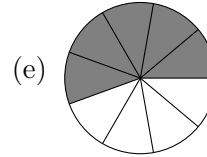
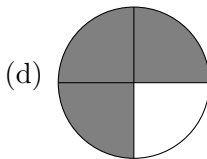
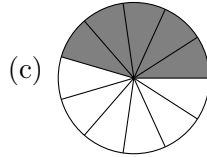
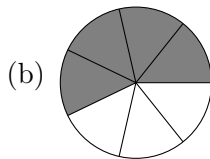
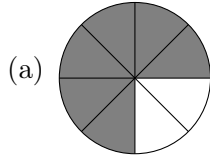
(i) $\frac{2}{4}$

(j) $\frac{5}{12}$

(k) $\frac{7}{9}$

(l) $\frac{2}{5}$

2. Färbe die entsprechenden Bruchteile



3. Berechne die Anteile.

(a) 8 km

(b) 2 g

(c) 24 mm

(d) 4 s

(e) 50 min

(f) 600 m

(g) 72 min

(h) 12 mm

(i) 220 s

4. Welcher Anteil ist gefärbt?

$$\frac{2}{5}; \frac{7}{10}; \frac{5}{10} = \frac{1}{2}$$